





MONDAY

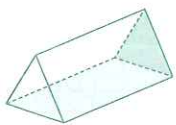

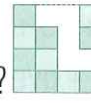



- The time is a quarter to
- $29 - 10 =$
- $8 \times 3 =$
- $8 \div 4 =$
- $11 + 11 + 11 =$
then $\div 11 = 3$
- Take \$7.00 away from \$12.00.
- Write two hundred and forty-seven as a numeral.
- $36 - 10 =$
- $3 + 8 =$
- A  B
How long is line AB? cm
- How many days are in March?
- $600 + 200 =$
- How many blocks are needed to fill in the gaps? 
- Double 9.
- 1 cm = mm
- Is this line vertical or horizontal? 
- Name this 2-D shape. 
- How many days are in a year?
- 4, 8, 12, 16,
- $800 + 60 + 2 =$



TUESDAY



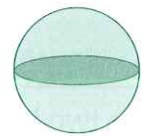



- The time is a quarter to
- $5 + 9 =$
- Round 27 to the nearest ten.
- $7 \times 3 =$
- What is the cost of buying 5 comics at \$2.00 each. \$
- Write the number sequence for Question 5.
x =
- cm = 1 m
- 2, 5, 8, 11,
- Name this 3-D shape. 
t r
p m
- $5^2 = 5 \times 5 =$
- A 2-D six-sided shape is a
- $40 \div 4 =$ So $4 \times = 40$ 
- $\$1.00 - 20c =$
- $\$5.00 - \$3.50 =$
- $13 - 7 =$
- How many blocks are needed to fill in the gaps? 
- Half of 42 =
- How many days are in April?
- How many months are in a year?
- Is this line vertical or horizontal? 



WEDNESDAY



- The time is a quarter to
- $5 + 3 =$
- $\$10.00 + \$4.50 =$
- $6 \times 5 =$
- How many days are in a leap year?
- $4 + 9 =$
- Double 44.
- Name this 2-D shape. 
- How many weeks are in a year?
- $12 + 8 =$
- A pentagon has sides
- 30, 60, 90,
- Which months are in winter?
☐ March, April, May
☐ June, July, August
- 1 minute = seconds
- Is this line vertical or horizontal? 
- $10^2 = 10 \times 10 =$
- Name this 3-D shape. 
sp e
- How many blocks are needed to fill in the gaps? 
- $39 - 10 =$
- $700 - 200 =$



THURSDAY



- The time is a quarter to
- Round 42 to the nearest ten.
- $12 - 8 =$
- Write one hundred and sixty-eight as a numeral.
- Sonja had 35 super sweet lollies for her party. She had 5 lolly bags to fill. How many lollies will be in each bag?
- $\$1.00 - 70c =$
- Write the number sentence for Question 5.
 $\div =$
- $\$10.00 - \$5.50 =$
- $6 + 4 =$
- $4^2 = 4 \times 4 =$
- $300 + 90 + 4 =$
- $6 + 8 =$
- At sunrise will it be am or pm?
- How many days are in February for this year?
- In 389, what is the meaning of the 8?
☐ 800 ☐ 80 ☐ 8
- 1 m = cm
- 4, 7, 10, 13
- An octagon has sides.
- Is a pentagon a quadrilateral?
- $40 \times 2 =$

